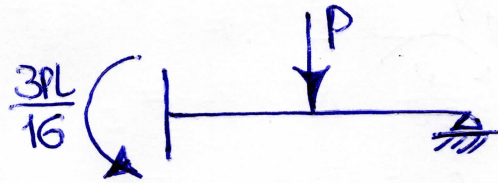
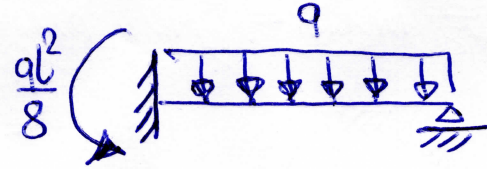
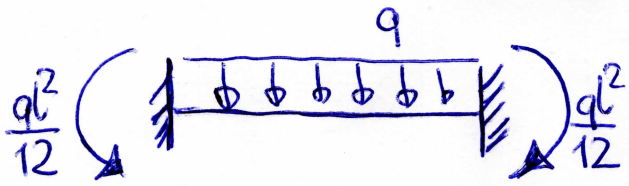


METODA PRZEMIESZCZEŃ

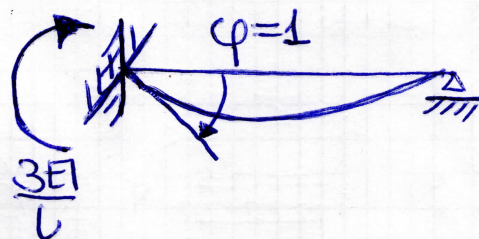
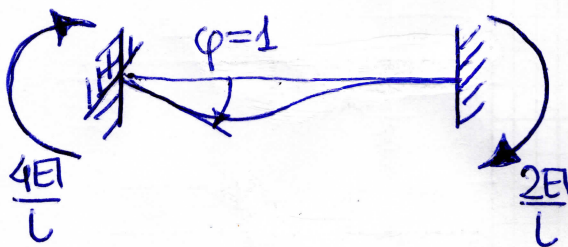
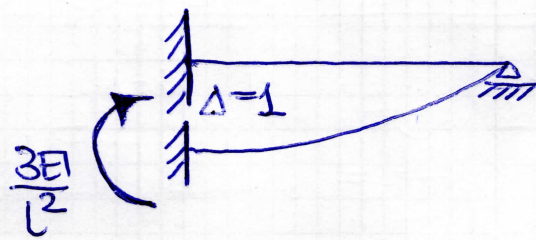
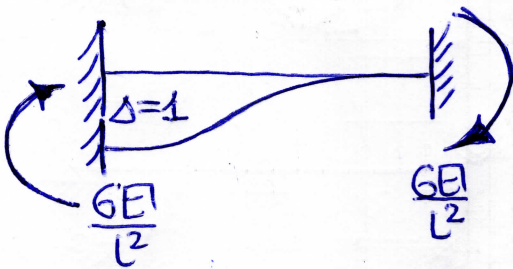
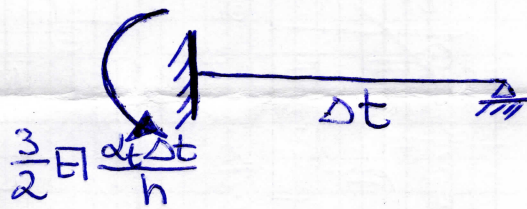


cw. 8/1

momenty wyjściowe w belkach obustronnie utwierdzonych (11) i jednostronnie utwierdzonych (10) pod działaniem najogólniejszych obciążeń i z oddziaływań przemieszczalnych (dane: l, EI)



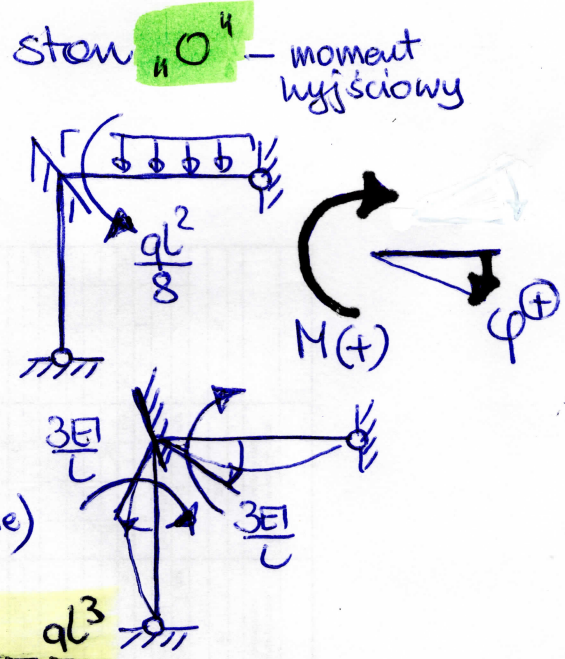
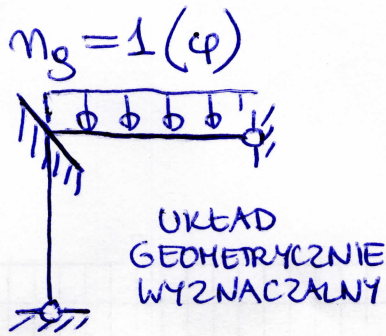
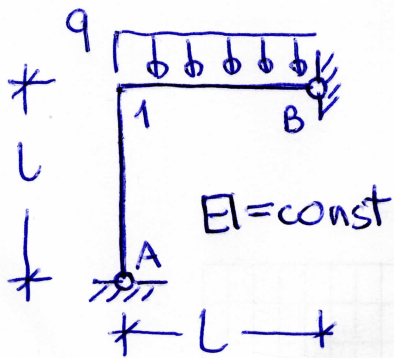
$$EI \frac{\alpha t \Delta t}{h}$$

$$EI \frac{\alpha t \Delta t}{h}$$



METODA PRZEMIESZCZEŃ

ĆW. 8/2



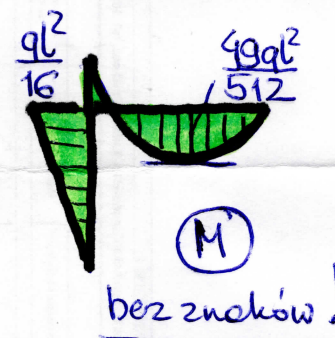
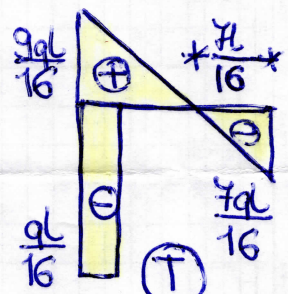
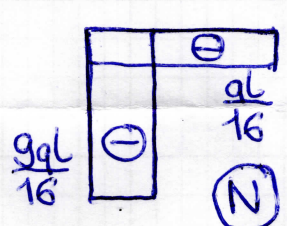
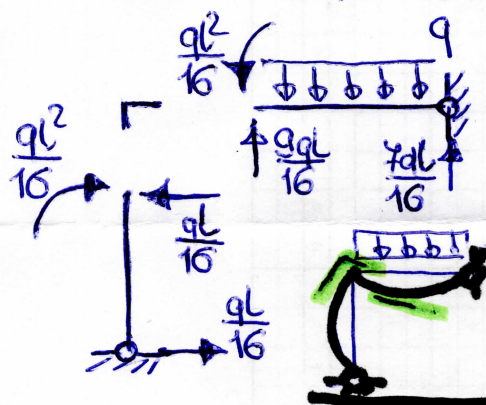
sumaryczne momenty przywęzłowe:

$$M_{1A} = \frac{3EI}{L} \varphi$$

$$M_{1B} = -\frac{ql^2}{8} + \frac{3EI}{L} \varphi$$

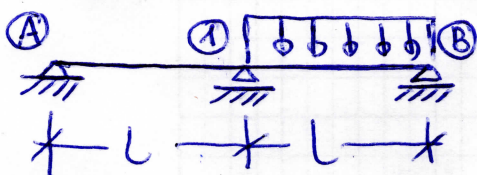
równanie równowagi: $\sum M_1 = M_{1A} + M_{1B} = 0 \Rightarrow \varphi = \frac{ql^3}{48EI}$

wartości momentów przywęzłowych: $M_{1A} = \frac{ql^2}{16}$, $M_{1B} = -\frac{ql^2}{8} + \frac{ql^2}{16} = -\frac{ql^2}{16}$



bez znaków!

$EI = \text{const}$

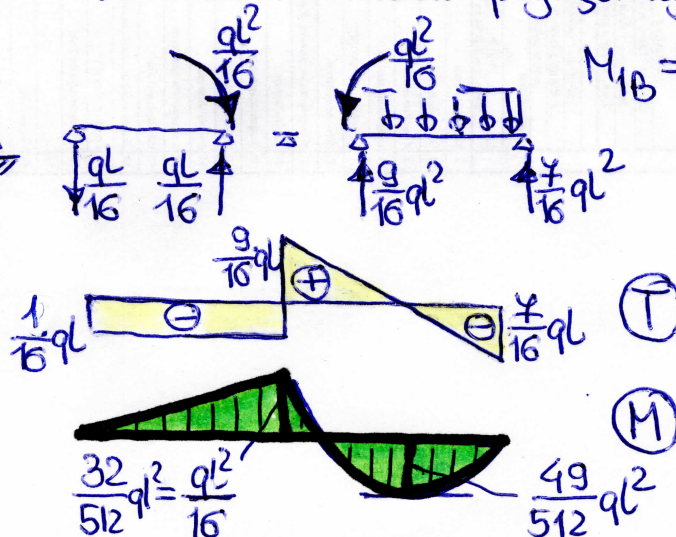
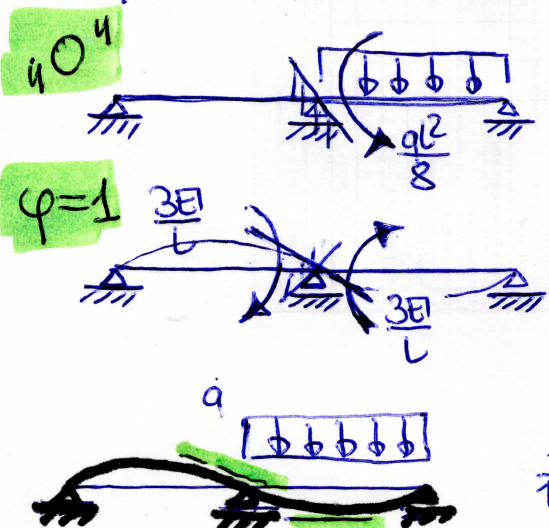


$n_g = 1(\varphi)$. Sumaryczne momenty przywęzłowe:


$$M_{1A} = \frac{3EI}{L} \varphi, \quad M_{1B} = -\frac{ql^2}{8} + \frac{3EI}{L} \varphi$$

Równanie równowagi: $\sum M_1 = M_{1A} + M_{1B} = 0 \Rightarrow \varphi = \frac{ql^3}{48EI}$

wartości momentów przywęzłowych: $M_{1A} = \frac{ql^2}{16}$
 $M_{1B} = -\frac{ql^2}{8} + \frac{ql^2}{16} = -\frac{ql^2}{16}$

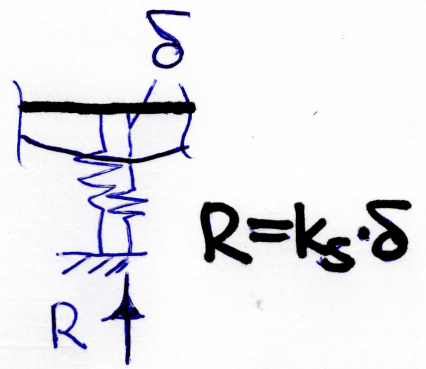


OGÓLNY PRZYPADEK: podpora sprężyste rotacyjna ćw. 8/3

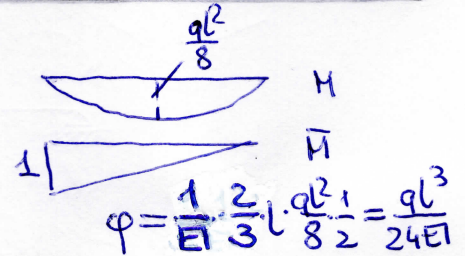
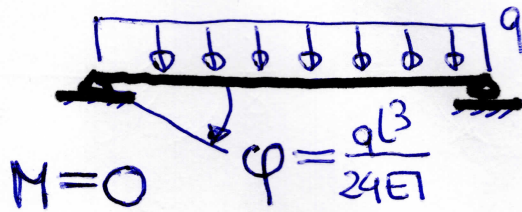


$$M = k_{\varphi} \cdot \varphi$$

analogia do podparcy translacyjnej

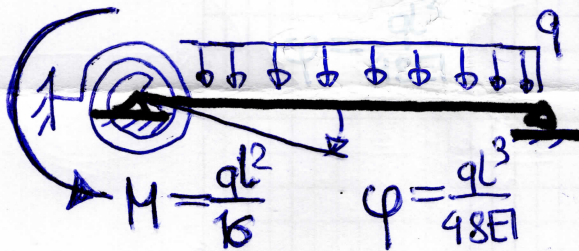


(A) przypadek: swobodny przegub



$$M = k_{\varphi} \cdot \varphi \Rightarrow 0 = k_{\varphi} \cdot \frac{ql^3}{24EI} \Rightarrow k_{\varphi} = 0$$

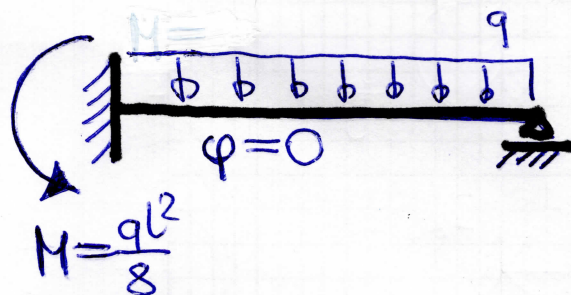
(B) dane zadanie



$$M = k_{\varphi} \cdot \varphi \Rightarrow \frac{ql^2}{16} = k_{\varphi} \cdot \frac{ql^3}{48EI}$$


$$k_{\varphi} = 3 \frac{EI}{l}$$

(C) przypadek: belka z podporą utwierdzoną

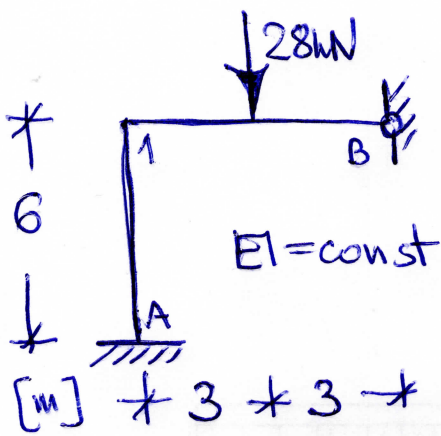


$$M = k_{\varphi} \cdot \varphi \Rightarrow \frac{ql^2}{8} = k_{\varphi} \cdot 0$$

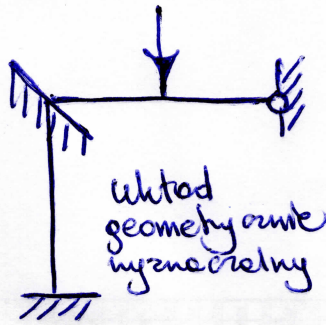
$$k_{\varphi} \rightarrow \infty$$



INNA INTERPRETACJA



$m_g = 1(\varphi)$



stan "0" - moment wyjściowy

$M_{1B}^0 = -\frac{3}{16} \cdot 6 \cdot 28 = -31,5 \text{ kNm}$

Sumaryczne momenty przywęzłowe:

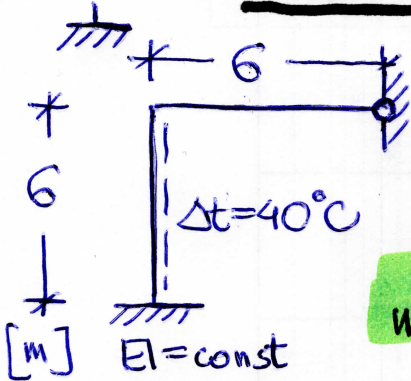
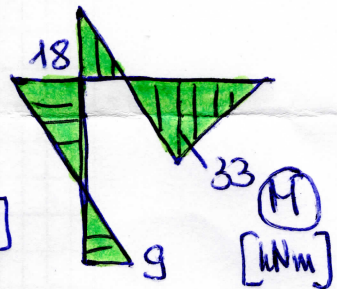
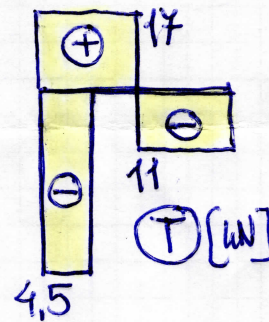
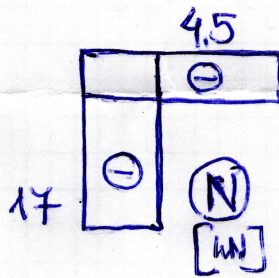
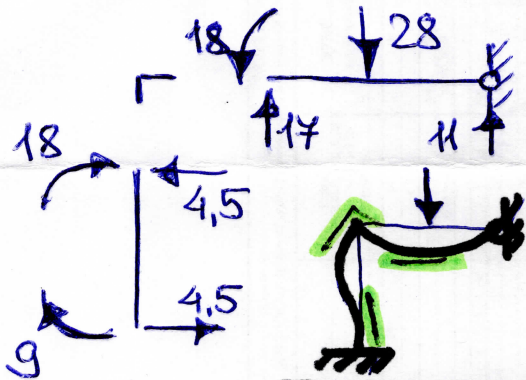
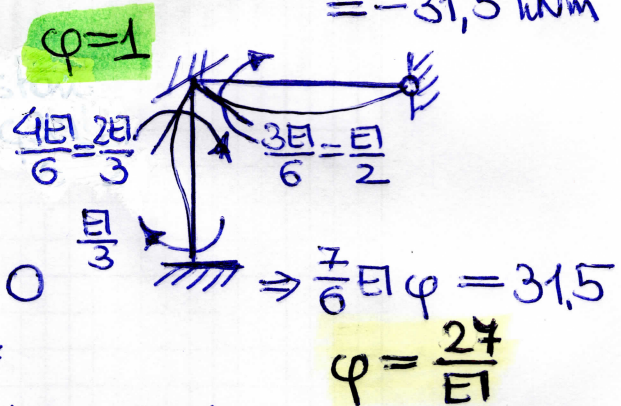
$M_{1A} = \frac{2}{3} EI \varphi$, $M_{A1} = \frac{1}{3} EI \varphi$

$M_{1B} = -31,5 + \frac{EI}{2} \varphi$

równanie równowagi: $\sum M_1 = M_{1A} + M_{1B} = 0$

Wartości momentów przywęzłowych:

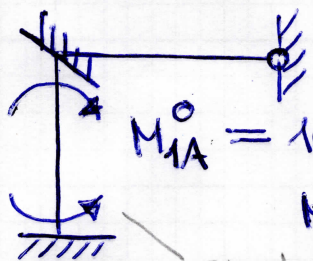
$M_{1A} = 18 \text{ kNm}$, $M_{1B} = -18 \text{ kNm}$, $M_{A1} = 9 \text{ kNm}$



$\alpha_t = 10^{-5} \frac{1}{^\circ\text{C}}$

$h = 0,4 \text{ m}$

$EI = 10^4 \text{ kNm}^2$



$M_{1A}^0 = 10^4 \cdot \frac{10^{-5} \cdot 40}{0,4} = 10 \text{ kNm}$

$M_{A1}^0 = -10 \text{ kNm}$

zwrot rzeczywisty

stan $\varphi = 1$ i związane z nim momenty bez zmian

Sumaryczne momenty przywęzłowe:

$M_{1A} = 10 + \frac{2}{3} EI \varphi$

$M_{1B} = \frac{EI}{2}$

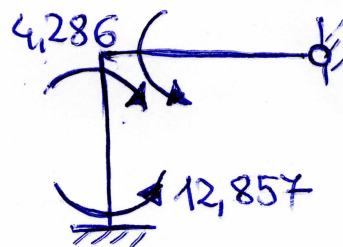
$M_{A1} = -10 + \frac{1}{3} EI \varphi$

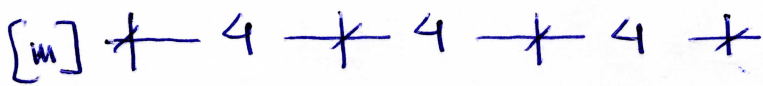
równanie równowagi: $\sum M_1 = 0 \Rightarrow \varphi = \frac{-8,5714}{EI}$

$M_{1A} = 4,286 \text{ kNm}$

$M_{1B} = -4,286 \text{ kNm}$

$M_{A1} = -12,857 \text{ kNm}$



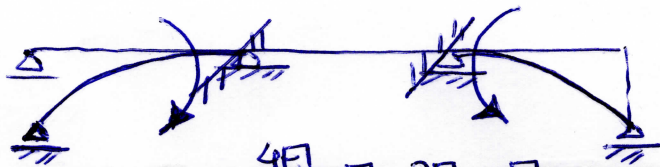


$$EI = 8000 \text{ kNm}^2 \quad \text{Ćw. 8/5}$$



$$n_s = 2 (\varphi_1, \varphi_2)$$

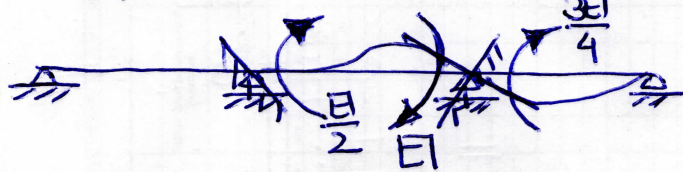
$u = 0$



$\varphi_1 = 1$



$\varphi_2 = 1$



momenty wyjściowe:

$$M_{1A}^0 = \frac{3 \cdot 8000 \cdot 0,02}{16} = 30 \text{ kNm}$$

$$M_{2B}^0 = -30 \text{ kNm}$$

sumaryczne momenty przywrócić:

$$M_{1A} = 30 + \frac{3}{4} EI \varphi_1$$

$$M_{12} = EI \varphi_1 + \frac{EI}{2} \varphi_2$$

$$M_{21} = \frac{EI}{2} \varphi_1 + EI \varphi_2$$

$$M_{2B} = -30 + \frac{3}{4} EI \varphi_2$$

Sumaryczne równowagi:

$$\sum M_1 = M_{1A} + M_{12} = 0 \Rightarrow \frac{7}{4} EI \varphi_1 + \frac{EI}{2} \varphi_2 + 30 = 0 \Rightarrow 7\varphi_1 + 2\varphi_2 = \frac{-120}{EI}$$

$$\sum M_2 = M_{21} + M_{2B} = 0 \Rightarrow \frac{EI}{2} \varphi_1 + \frac{7}{4} EI \varphi_2 - 30 = 0 \Rightarrow 2\varphi_1 + 7\varphi_2 = \frac{120}{EI}$$

$$W = 45 \quad W_1 = \frac{120}{EI} \begin{vmatrix} -1 & 2 \\ 1 & 7 \end{vmatrix} = \frac{-1080}{EI}$$

$$W_2 = \frac{120}{EI} \begin{vmatrix} 7 & -1 \\ 2 & 1 \end{vmatrix} = \frac{1080}{EI}$$




$$\varphi_1 = -\frac{24}{EI}, \quad \varphi_2 = \frac{24}{EI}$$

$$M_{1A} = 12 \text{ kNm}$$

$$M_{21} = 12 \text{ kNm}$$

$$M_{12} = -12 \text{ kNm}$$

$$M_{2B} = -12 \text{ kNm}$$



Ze względu na symetrię układu i obciążenie (oddziaływanie zewnętrzne - pozostawiczone) można przyjąć $\varphi_2 = -\varphi_1$ i od razu rozpatrywać równowagę TYLKO JEDNEGO WĘZŁA

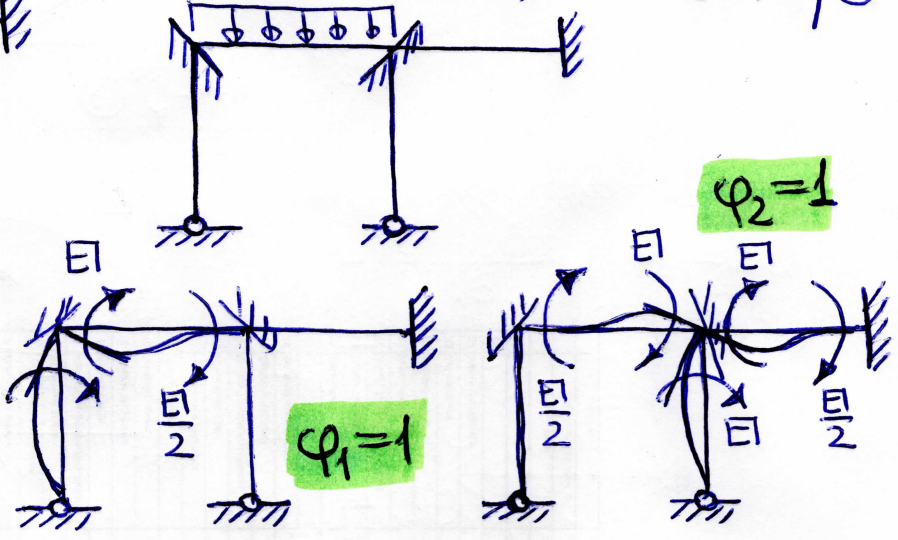
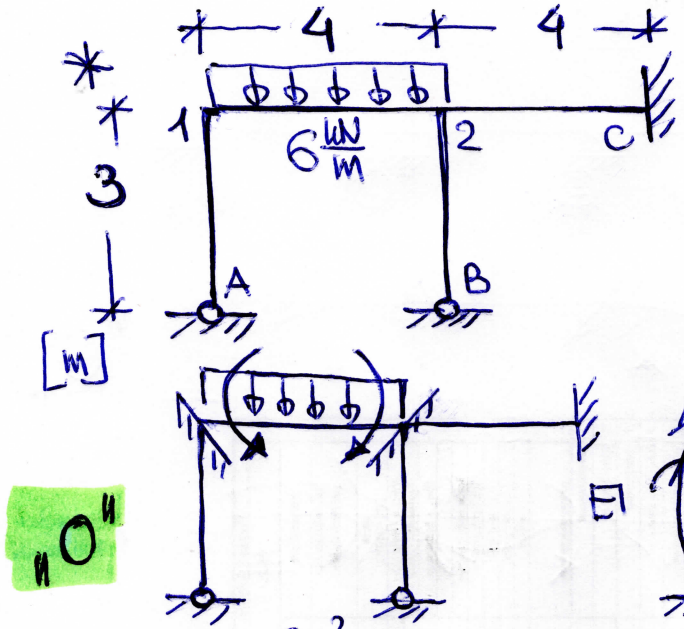
$$M_{1A} = 30 + \frac{3}{4} EI \varphi_1$$

$$M_{12} = EI \varphi_1 + \frac{EI}{2} \varphi_2 \stackrel{\text{sym.}}{=} \frac{EI}{2} \varphi_1$$

$$\text{równowaga równowagi: } \sum M_1 = M_{1A} + M_{12} = 30 + \frac{5}{4} EI \varphi_1 = 0 \Rightarrow \varphi_1 = \frac{-24}{EI}$$

stąd $M_{1A} = 12 \text{ kNm}$, $M_{12} = -12 \text{ kNm}$, pozostałe symetryczne

$m_3 = 2(\varphi_1, \varphi_2)$



$M_{12}^0 = -\frac{6 \cdot 4^2}{12} = -8 \text{ kNm}$
 $M_{21}^0 = 8 \text{ kNm}$

Sumaryczne momenty przywęzłowe:

$M_{1A} = EI \varphi_1$
 $M_{12} = -8 + EI \varphi_1 + \frac{EI}{2} \varphi_2$
 $M_{21} = 8 + \frac{EI}{2} \varphi_1 + EI \varphi_2$
 $M_{2B} = M_{2C} = EI \varphi_2$
 $M_{C2} = \frac{EI}{2} \varphi_2$

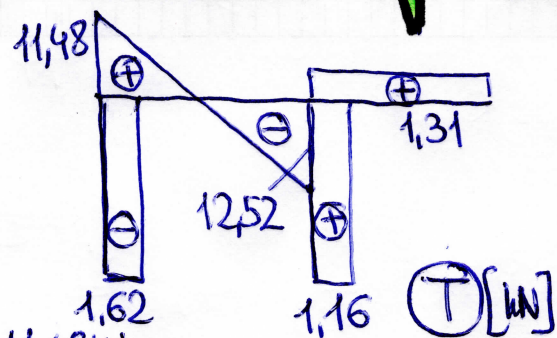
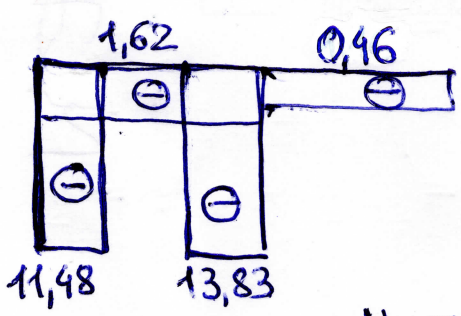
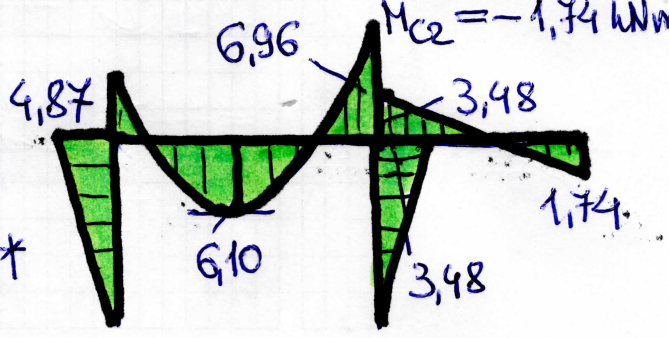
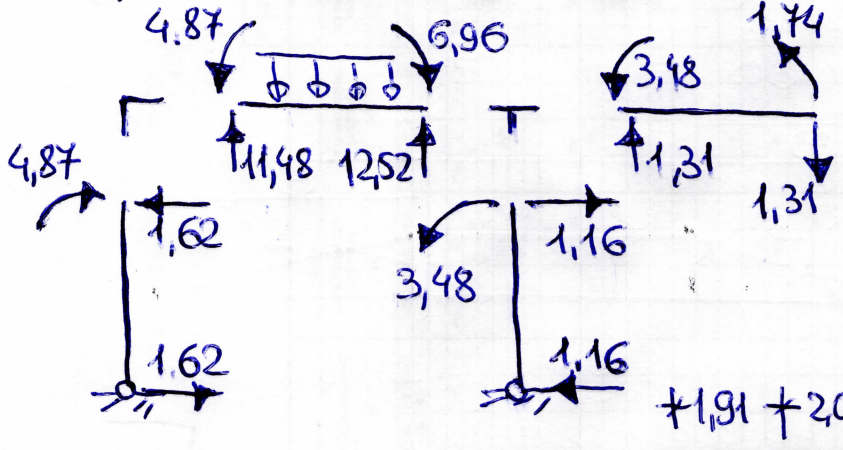
Równania równowagi:

$\sum M_1 = M_{1A} + M_{12} = -8 + 2EI\varphi_1 + \frac{EI}{2}\varphi_2 = 0 \Rightarrow 4\varphi_1 + \varphi_2 = \frac{16}{EI}$
 $\sum M_2 = M_{21} + M_{2B} + M_{2C} = 8 + \frac{EI}{2}\varphi_1 + 3EI\varphi_2 = 0 \Rightarrow \varphi_1 + 6\varphi_2 = -\frac{16}{EI}$

$W = 23 \quad W_1 = \frac{16}{EI} \begin{vmatrix} 1 & 1 \\ -1 & 6 \end{vmatrix} = \frac{112}{EI} \quad W_2 = \frac{16}{EI} \begin{vmatrix} 4 & 1 \\ 1 & -1 \end{vmatrix} = -\frac{80}{EI}$

$\varphi_1 = 4,87 \frac{1}{EI} \quad \varphi_2 = -3,48 \frac{1}{EI}$

$M_{1A} = 4,87 \text{ kNm}$
 $M_{12} = -4,87 \text{ kNm}$
 $M_{21} = 6,96 \text{ kNm}$
 $M_{2B} = -3,48 \text{ kNm}$
 $M_{2C} = -3,48 \text{ kNm}$
 $M_{C2} = -1,74 \text{ kNm}$



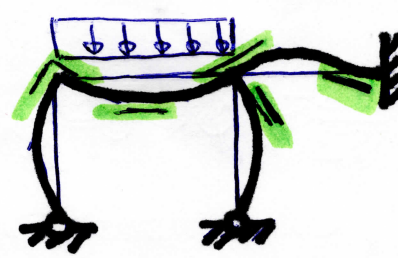
(N) [kN]

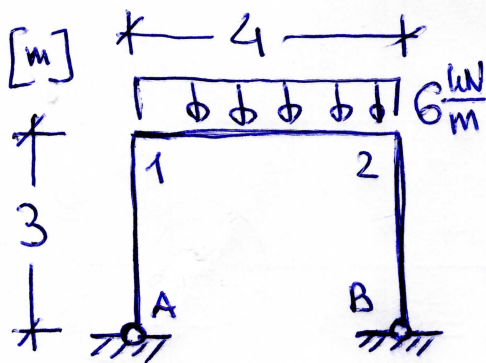
$N_{1A} = -11,48 \text{ kN}$
 $N_{12} = -1,62 \text{ kN}$
 $N_{2C} = -1,62 + 1,16 = -0,46 \text{ kN}$

(T) [kN]

$N_{2B} = -12,52 - 1,31 = -13,83 \text{ kN}$

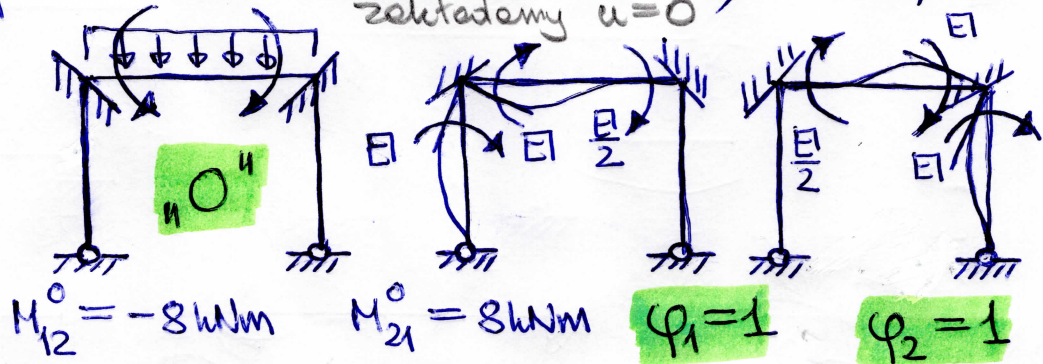
(M) [kNm]





bezpośrednio: $m_3 = 2(\varphi_1, \varphi_2)$ ćw. 8/7

zakładamy $u=0$



$$M_{12}^0 = -8 \text{ kNm}$$

$$M_{21}^0 = 8 \text{ kNm}$$

$$\varphi_1 = 1$$

$$\varphi_2 = 1$$

sumaryczne momenty przywęzłowe:

$$M_{1A} = EI \varphi_1$$

$$M_{21} = 8 + \frac{EI}{2} \varphi_1 + EI \varphi_2$$

$$M_{12} = -8 + EI \varphi_1 + \frac{EI}{2} \varphi_2$$

$$M_{2B} = EI \varphi_2$$

równania równowagi:

$$\sum M_1 = M_{1A} + M_{12} = -8 + 2EI \varphi_1 + \frac{EI}{2} \varphi_2 = 0 \Rightarrow 4\varphi_1 + \varphi_2 = \frac{16}{EI}$$

$$\sum M_2 = M_{21} + M_{2B} = 8 + \frac{EI}{2} \varphi_1 + EI \varphi_2 = 0 \Rightarrow \varphi_1 + 4\varphi_2 = \frac{-16}{EI}$$

$$W = 15 \quad W_1 = \frac{16}{EI} \begin{vmatrix} 1 & 1 \\ -1 & 4 \end{vmatrix} = \frac{80}{EI}$$

$$W_2 = \frac{16}{EI} \begin{vmatrix} 4 & 1 \\ 1 & -1 \end{vmatrix} = \frac{-80}{EI}$$

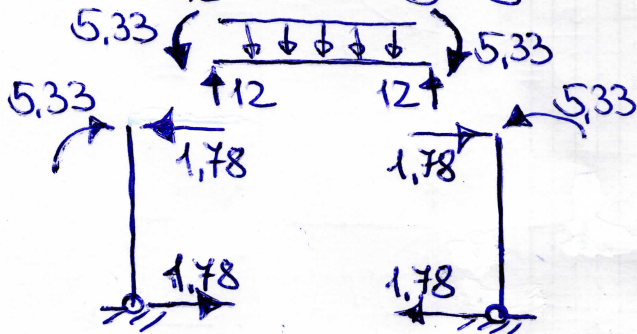
stąd $\varphi_1 = \frac{16}{3EI}$, $\varphi_2 = -\frac{16}{3EI}$. Wartości momentów przywęzłowych:

$$M_{1A} = \frac{16}{3} = 5,333 \text{ kNm}$$

$$M_{21} = 8 + \frac{8}{3} - \frac{16}{3} = 5,333 \text{ kNm}$$

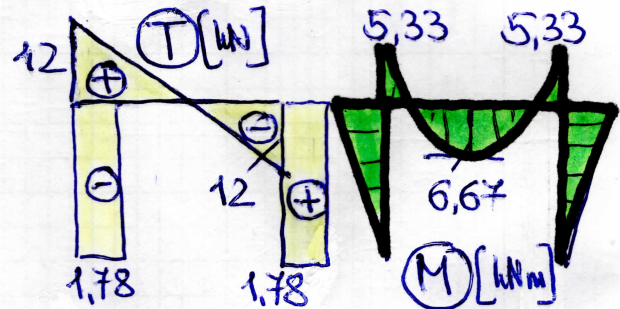
$$M_{12} = -8 + \frac{16}{3} - \frac{8}{3} = -5,333 \text{ kNm}$$

$$M_{2B} = -\frac{16}{3} = -5,333 \text{ kNm}$$



(N) [kN]

	⊖	
	1,78	
12	⊖	12



Mozna wykorzystać symetrię układu i obciążenie

$$u=0, \varphi_2 = -\varphi_1 \Rightarrow \textcircled{1} \quad M_{1A} = EI \varphi_1, \quad M_{12} = -8 + \frac{EI}{2} \varphi_1$$

$$\sum M_1 = M_{1A} + M_{12} = -8 + \frac{3EI}{2} \varphi_1 = 0 \Rightarrow \varphi_1 = \frac{16}{3EI}$$

stąd $M_{1A} = 5,333 \text{ kNm}$, $M_{12} = -5,333 \text{ kNm}$, reszta symetrycznie

